

Name: _____

Date: _____



How Much Time?


Hours Worksheet 1



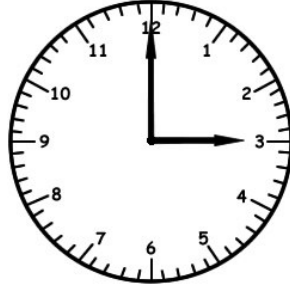
Write the time inside each clock below. Tell how much time has passed.

1)

Josh started cooking at...



Josh ate lunch at...



How much time has passed?

2)

Bob went to the store at...




Bob got home at...



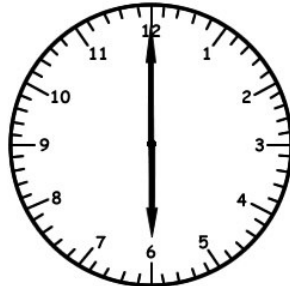
How much time has passed?

3)

Ken went to bed at...



Ken woke up at...



How much time has passed?

Name: _____

Date: _____



How Much Time?

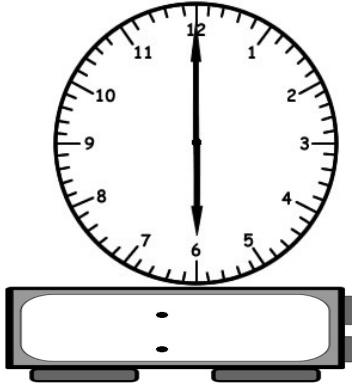
Hours Worksheet 2



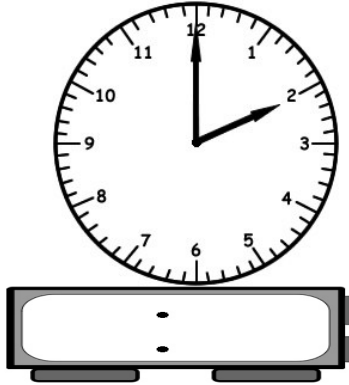
Write the time inside each clock below. Tell how much time has passed.

1)

Bill started work at...



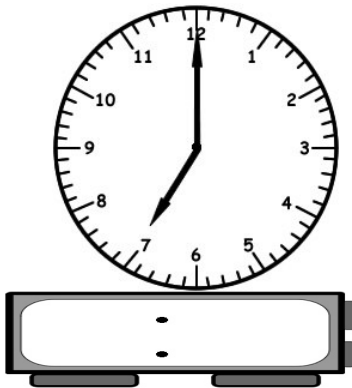
Bill got out of work at...



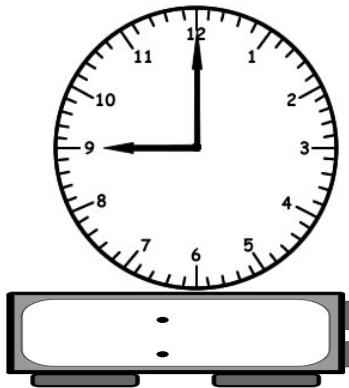
How much time has passed?

2)

Thad went to dinner at...



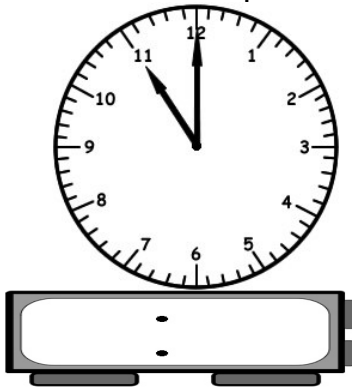
Thad went home at...



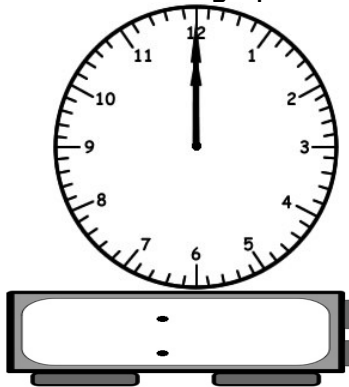
How much time has passed?

3)

Justin used the phone at...



Justin hung up at...



How much time has passed?

Name: _____

Date: _____



How Much Time?



Hours
Worksheet 3




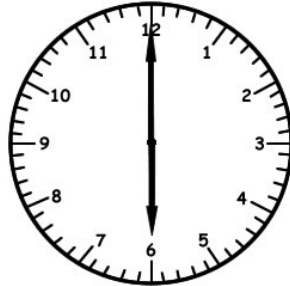
Write the time inside each clock below. Tell how much time has passed.

1)

Kate went outside at...





Kate went inside at...





How much time has passed?

2)

Stan went to the gym at...





Stan went home at...




How much time has passed?

3)

Bertha's game was at...



She got home at...



How much time has passed?

Name: _____

Date: _____



How Much Time?


Hours Worksheet 4



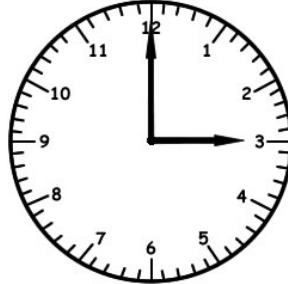
Write the time inside each clock below. Tell how much time has passed.

1)

Tammy got sick at...




Tammy felt better at...



How much time has passed?

2)

Nancy mowed the lawn at...



She cut all the grass by...



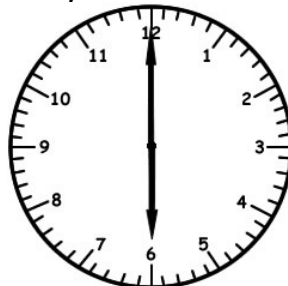
How much time has passed?

3)

Randy ate breakfast at...



Randy ate dinner at...



How much time has passed?

Name: _____

Date: _____



How Much Time?

Hours Worksheet 5



Write the time inside each clock below. Tell how much time has passed.

1)

Phil went to the mall at...



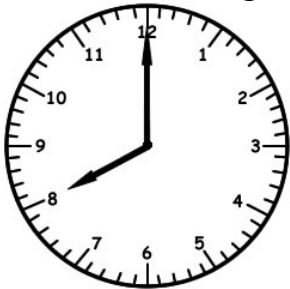
Phil came home at...



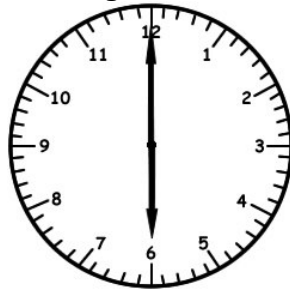
How much time has passed?

2)

Blanch went fishing at...




She caught a fish at...



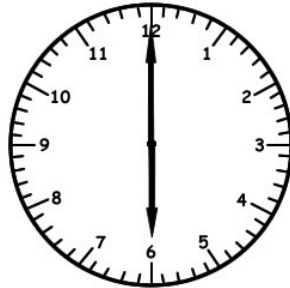
How much time has passed?

3)

Brody played piano at...



His lesson was over at...



How much time has passed?

Name: _____

Date: _____



How Much Time?

Hour

Answer Key

Worksheets 1-5



Worksheet 1

1) 2:00 3:00 1 Hour

2) 8:00 11:00 3 Hours

3) 9:00 6:00 9 Hours

Worksheet 2

1) 6:00 2:00 8 Hours

2) 7:00 9:00 2 Hours

3) 11:00 12:00 1 Hour

Worksheet 3

1) 4:00 6:00 2 Hours

2) 7:00 10:00 3 Hours

3) 2:00 7:00 5 Hours

Worksheet 4

1) 9:00 3:00 6 Hours

2) 5:00 7:00 2 Hours

3) 7:00 6:00 11 Hours

Worksheet 5

1) 12:00 4:00 4 Hours

2) 8:00 6:00 10 Hours

3) 3:00 6:00 3 Hours