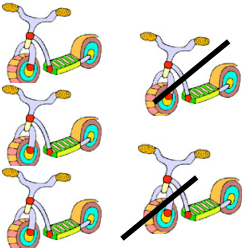




Name _____


Vertical Subtraction


Write the answer under the line.


	$\begin{array}{r} 5 \\ - 2 \\ \hline \end{array}$
---	---

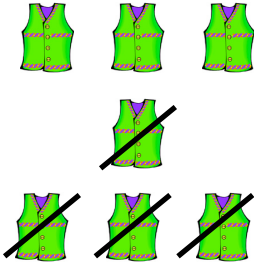
	$\begin{array}{r} 9 \\ - 1 \\ \hline \end{array}$
---	---


	$\begin{array}{r} 10 \\ - 9 \\ \hline \end{array}$
---	--


	$\begin{array}{r} 4 \\ - 1 \\ \hline \end{array}$
---	---


	$\begin{array}{r} 5 \\ - 3 \\ \hline \end{array}$
---	---


	$\begin{array}{r} 6 \\ - 2 \\ \hline \end{array}$
---	---


	$\begin{array}{r} 7 \\ - 4 \\ \hline \end{array}$
--	---


	$\begin{array}{r} 9 \\ - 7 \\ \hline \end{array}$
--	---

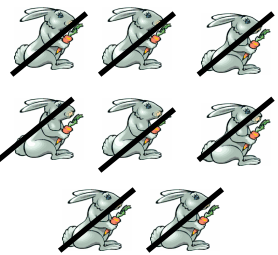
	$\begin{array}{r} 8 \\ - 2 \\ \hline \end{array}$
--	---


	$\begin{array}{r} 5 \\ - 5 \\ \hline \end{array}$
---	---

	$\begin{array}{r} 3 \\ - 1 \\ \hline \end{array}$
---	---

	$\begin{array}{r} 10 \\ - 8 \\ \hline \end{array}$
---	--

	$\begin{array}{r} 6 \\ - 4 \\ \hline \end{array}$
---	---

	$\begin{array}{r} 8 \\ - 8 \\ \hline \end{array}$
---	---

	$\begin{array}{r} 7 \\ - 5 \\ \hline \end{array}$
---	---