



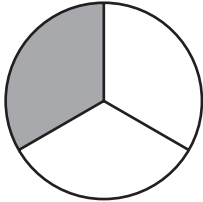
Name _____ Date _____

1. Three friends have numbers printed on their shirts. If they try to line up side-by-side to make a number, what is the largest number they could make? (Write the answer on the line.)




2. Circle the letter of the shape that matches $\frac{1}{4}$.

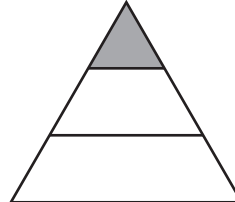
A.



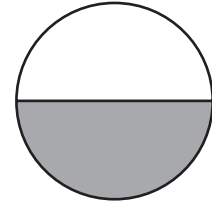
B.



C.



D.



Name _____ Date _____

1. In the number 135, which digit is in the **ones** place? (Circle the correct letter.)

A. one

C. three

B. five

D. zero

2. Circle the number that is closest to 712.

710

720

750