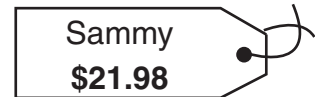
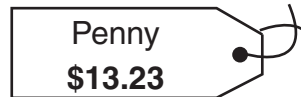
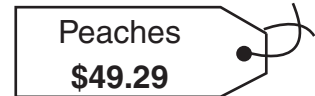



Name _____ Date _____

1. Mary bought 3 teddy bears. She spent a total of \$84.50. Which 3 bears did Mary buy? (Circle the correct letter.)

- A. Penny, Peaches, and Sammy
- B. Kyle, Penny, and Sammy
- C. Peaches, Kyle, and Penny
- D. Sammy, Peaches, and Kyle



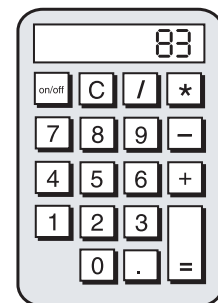
2. Find the prime factorization for the number 480 using exponents. (Show your work and circle your final answer.)



Name _____ Date _____

1. Look at the display on the calculator. If the number on the display is the divisor and 259 is the quotient, which number below is the dividend? (Circle the correct letter.)

- A. 21,749
- B. 21,947
- C. 21,479
- D. 21,497



2. Solve the multiplication problems below.

A.
$$\begin{array}{r} 74 \\ \times 59 \\ \hline \end{array}$$

+			

B.
$$\begin{array}{r} 58 \\ \times 66 \\ \hline \end{array}$$

+			

C.
$$\begin{array}{r} 75 \\ \times 78 \\ \hline \end{array}$$

+			

D.
$$\begin{array}{r} 84 \\ \times 59 \\ \hline \end{array}$$

+			