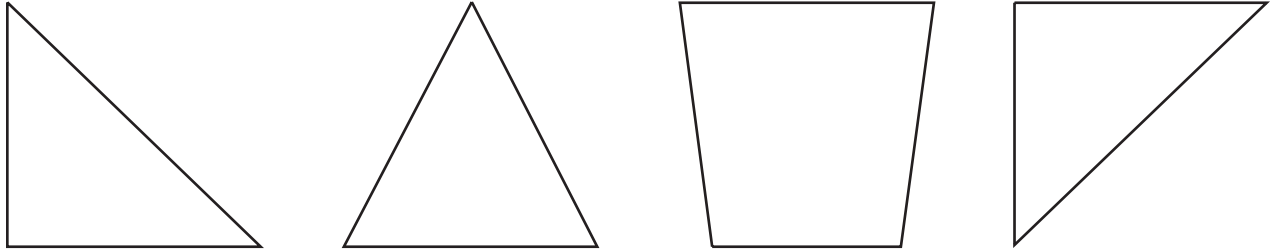







Name _____ Date _____

1. Put an **X** on the shape that is **NOT** a triangle.



2. Which clock reads **5:15**? (Circle the correct letter.)



Name _____ Date _____

1. Circle the shape with the **most sides**.



2. How many **sides** does a square have? (Circle the correct letter.)

- A. 2
- B. 4
- C. 6

