




Name _____ Date _____


1. Pete picked 8 apples from an apple tree. Jason picked 4 more than Pete. How many apples did Jason pick?

_____ apples



2. Fill in the correct symbol. Use the symbols $<$, $>$, or $=$.



13 ○ 23





Name _____ Date _____

1. Look at the scoreboard. How many more points did Luke score than Jim?

_____ more points

Score Board	
Jim	Luke
	

2. Solve the problem. Write the number.


 $-$

 $=$
