










Adding 3 Numbers

Directions: Solve each problem. Use the sums to figure out what to color the fish in the tank below.

<p>1. $\begin{array}{r} 3 \\ 2 \\ + 5 \\ \hline \end{array}$</p>  <p>Green</p>	<p>2. $\begin{array}{r} 4 \\ 1 \\ + 3 \\ \hline \end{array}$</p>  <p>Blue</p>	<p>3. $\begin{array}{r} 5 \\ 5 \\ + 2 \\ \hline \end{array}$</p>  <p>Red</p>
<p>4. $\begin{array}{r} 6 \\ 1 \\ + 0 \\ \hline \end{array}$</p>  <p>Orange</p>	<p>5. $\begin{array}{r} 3 \\ 4 \\ + 4 \\ \hline \end{array}$</p>  <p>Yellow</p>	<p>6. $\begin{array}{r} 5 \\ 7 \\ + 1 \\ \hline \end{array}$</p>  <p>Purple</p>
<p>7. $\begin{array}{r} 4 \\ 3 \\ + 2 \\ \hline \end{array}$</p>  <p>Pink</p>	<p>8. $\begin{array}{r} 3 \\ 2 \\ + 1 \\ \hline \end{array}$</p>  <p>Brown</p>	<p>9. $\begin{array}{r} 6 \\ 5 \\ + 3 \\ \hline \end{array}$</p>  <p>Black</p>

