


Odd or Even?

Figure out how many objects there are and then figure out if there is an odd or even number of them.




How many? _____

Odd or even? _____




How many? _____

Odd or even? _____




How many? _____

Odd or even? _____



How many? _____

Odd or even? _____



How many? _____

Odd or even? _____