



# Odd or Even?

Figure out how many objects there are and then figure out if there is an odd or even number of them.



How many? \_\_\_\_\_

Odd or even? \_\_\_\_\_




How many? \_\_\_\_\_

Odd or even? \_\_\_\_\_




How many? \_\_\_\_\_

Odd or even? \_\_\_\_\_



How many? \_\_\_\_\_

Odd or even? \_\_\_\_\_



How many? \_\_\_\_\_

Odd or even? \_\_\_\_\_