

Corner Store Math


You are the owner of the best dime store in your town. To offer your customers the best price, you must purchase your merchandise in large quantities and then repack the items in small packages for sale to your customers. Using the information provided in each box, calculate how many packages will be available to your customers.



276
emery boards

12 emery boards per package.

How many packages will there be? _____



756
pencils

6 pencils per package.

How many packages will there be? _____



36
flashlights

2 flashlights per package.

How many packages will there be? _____



576
batteries

18 batteries per package.

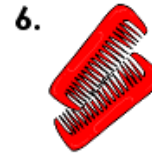
How many packages will there be? _____



856
light bulbs

4 light bulbs per package.

How many packages will there be? _____



447
combs

3 combs per package.

How many packages will there be? _____



136
journals

2 journals per package.

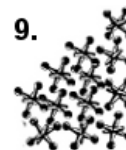
How many packages will there be? _____



448
cans of dog food

4 cans per package.

How many packages will there be? _____




1956
jacks

12 jacks per package.

How many packages will there be? _____

Corner Store Math

You are the owner of the best dime store in your town. To offer your customers the best price, you must purchase your merchandise in large quantities and then repack the items in small packages for sale to your customers. Using the information provided in each box, calculate how many packages will be available to your customers.

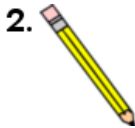


276
emery boards

12 emery boards per package.

How many packages will there be? 23

$$276 \div 12 = 23$$



756
pencils

6 pencils per package.

How many packages will there be? 126

$$756 \div 6 = 126$$



36
flashlights

2 flashlights per package.

How many packages will there be? 18

$$36 \div 2 = 18$$



576
batteries

18 batteries per package.

How many packages will there be? 32

$$576 \div 18 = 32$$



856
light bulbs

4 light bulbs per package.

How many packages will there be? 214

$$856 \div 4 = 214$$



447
combs

3 combs per package.

How many packages will there be? 149

$$447 \div 3 = 149$$



136
journals

2 journals per package.

How many packages will there be? 68

$$136 \div 2 = 68$$

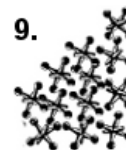


448
cans of dog food

4 cans per package.

How many packages will there be? 112

$$448 \div 4 = 112$$



1956
jacks

12 jacks per package.

How many packages will there be? 163

$$1956 \div 12 = 163$$