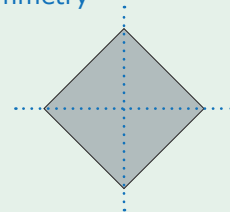
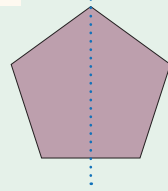



A line of symmetry is an imaginary line that divides a figure into two equal parts.




One line of symmetry

More than one line of symmetry

Three of the shapes below have one line of symmetry. The other three have more than one. On each shape, draw the correct number of lines of symmetry.


1



2




3



4



5




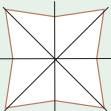
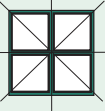


6



ANSWER

Page 171

- 1.  ;
- 2.  ;
- 3.  ;
- 4.  ;
- 5.  ;
- 6. 