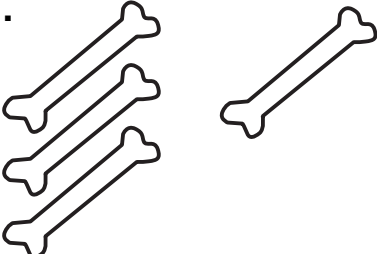

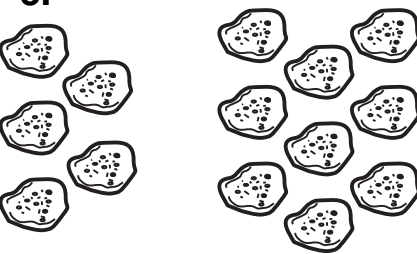
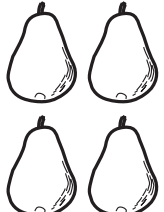





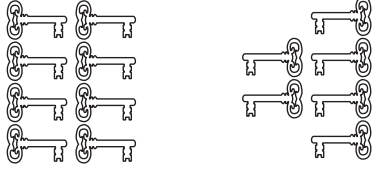

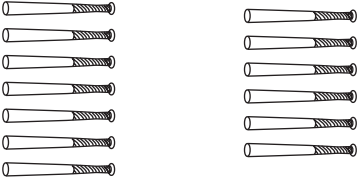


Count the number of items in each group. Write the number of items on the line. In each box, circle the group that has more items in it.

<p>1.</p>  <p>3 1</p>	<p>2.</p>  <p>_____</p>	<p>3.</p>  <p>_____</p>
<p>4.</p>  <p>_____</p>	<p>5.</p>  <p>_____</p>	<p>6.</p>  <p>_____</p>

Count the number of items in each group. Write the number of items on the line. In each box, circle the group that has fewer items in it.

<p>7.</p>  <p>5 9</p>	<p>8.</p>  <p>_____</p>	<p>9.</p>  <p>_____</p>
<p>10.</p>  <p>_____</p>	<p>11.</p>  <p>_____</p>	<p>12.</p>  <p>_____</p>

Now Try This: Write the numbers from 10 to 0.