

Making Change for \$1 and Identifying Different Bills

Directions: Color the coins needed to make exactly \$1.00. Remember, \$1.00 is worth 100 cents.

1.



2.



3.



4.



5.



6.



Directions: Money made from paper are called “dollar bills.” Each dollar bill has a number on it telling how much money it is worth. Write the name of the president whose face appears on the following bills.


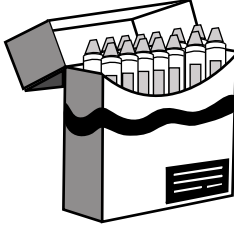
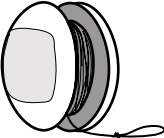




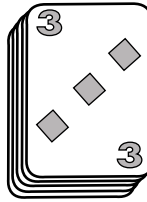
7. \$1 _____

8. \$20 _____

9. \$5 _____

10. \$10 _____

Directions: Each item costs a different amount of money. What is the price of each item? Count the money and write the price on the line. Remember to use the decimal point in each answer.

<p>1.</p>  <p>1 dollar 2 quarters 1 nickel 1 penny</p> <p>A bag of popcorn costs \$ _____</p>	<p>5.</p>  <p>2 dollars 2 quarters 3 dimes</p> <p>A box of crayons costs \$ _____</p>
<p>2.</p>  <p>5 dollars 2 dimes 1 nickel</p> <p>A yo-yo costs \$ _____</p>	<p>6.</p>  <p>2 dollars 3 quarters 3 nickels 9 pennies</p> <p>A small teddy bear costs \$ _____</p>
<p>3.</p>  <p>3 dollars 2 dimes 3 nickels</p> <p>A puzzles and games book costs \$ _____</p>	<p>7.</p>  <p>5 dollars 3 quarters</p> <p>A flower pot costs \$ _____</p>
<p>4.</p>  <p>4 dollars 1 quarter 5 pennies</p> <p>A jump rope costs \$ _____</p>	<p>8.</p>  <p>2 dollars 3 dimes 1 nickel</p> <p>A deck of cards costs \$ _____</p>

Using a Chart to Solve Money Problems

Directions: Belinda earns money for her classroom for each magazine subscription that she sells. Complete the chart to show how much Belinda earns selling magazine subscriptions.

number of magazines	money earned	number of magazines	money earned
_____	\$1	_____	_____
_____	_____	_____	_____
4	\$4	8	\$8
5	\$5	10	\$10

Directions: Read the information that tells the number of magazine subscriptions Belinda sold. Use the chart to figure out how much money Belinda earned each day. Graph the information on the chart.

\$10					
\$9					
\$8					
\$7					
\$6					
\$5					
\$4					
\$3					
\$2					
\$1					
	Monday	Tuesday	Wednesday	Thursday	Friday

- On Monday, Belinda sold 4 magazine subscriptions. Belinda earned \$_____.
- On Tuesday, Belinda sold 7 magazine subscriptions. Belinda earned \$_____.
- On Wednesday, Belinda sold 1 magazine subscription. Belinda earned \$_____.
- On Thursday, Belinda sold the same number of magazine subscriptions as Monday and Wednesday together. Belinda sold _____ magazine subscriptions. Belinda earned \$_____.
- On Friday, Belinda sold twice the number of magazine subscriptions as she sold on Wednesday. Belinda sold _____ magazine subscriptions. Belinda earned \$_____.
- How many magazine subscriptions did Belinda sell in all? _____ magazine subscriptions
- What was the total amount of money Belinda earned? \$_____
- On what day did Belinda sell the most magazine subscriptions? _____