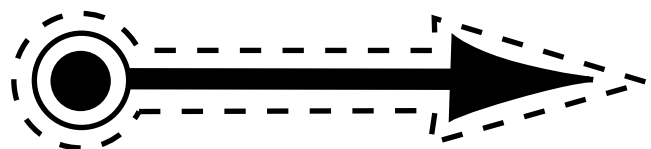
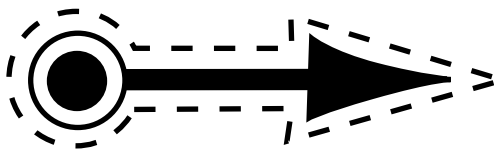
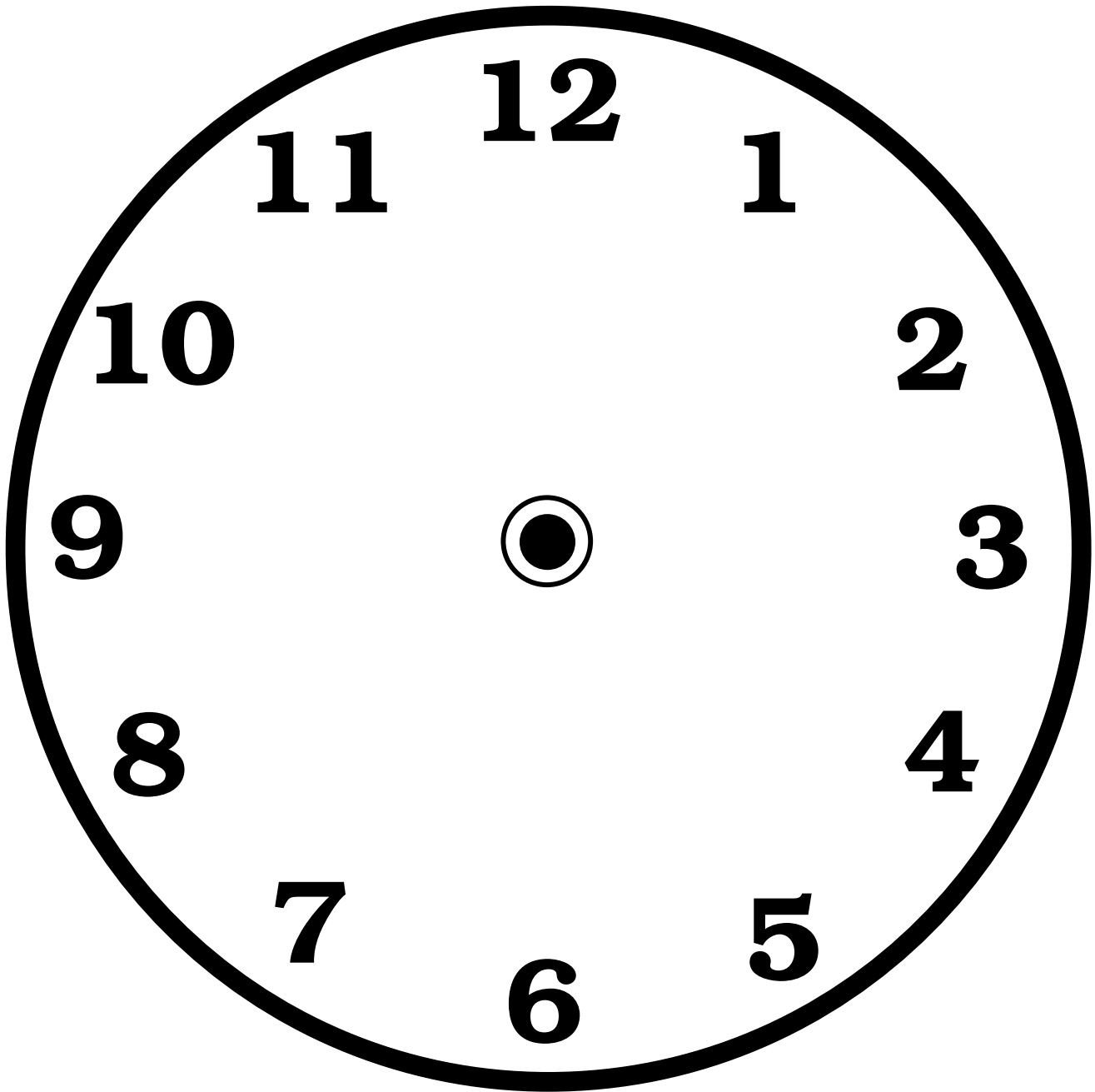


1

Practice

..... Making Your Own Clock

Directions: Copy the clock onto construction paper or cardstock. Cut out the pieces and use a paper fastener to attach the hour and minute hands to the face of the clock.



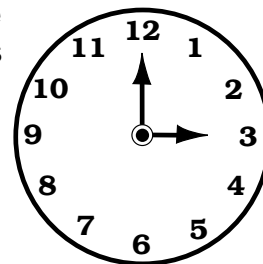
1

Practice

••••• Using the Hour and Minute Hands


A clock has two “hands” called the “hour hand” and the “minute hand.” The *hour hand* is shorter and tells the hour. The *minute hand* is longer and tells the number of minutes.

The minute hand is pointing to the number 12. That means there are (0) minutes in this hour. Zero minutes are written like this :00. The hour hand is pointing to the 3. The time is 3 o'clock or 3:00.




Directions: Read the time below each clock. Draw the hour and minute hands to show the correct time.

1.




7:00

2.




1:00

3.




12:00

4.




4:00

5.




3:00

6.




9:00

7.




5:00

8.




11:00

9.




6:00

10.




10:00

11.



2:00

12.




8:00

A clock has two “hands.” One hand is called the “hour hand” and the other hand is called the “minute hand.” The *hour hand* is shorter and tells the hour. The *minute hand* is longer and tells the number of minutes.


The hour hand is pointing to the 3. The time is 3 o'clock or 3:00.

The minute hand is pointing to the number 12. That means there are (0) minutes in this hour. Zero minutes are written like this :00.

Directions: Read the time on each clock. Write the correct time on each line.




1.




____ : ____

2.




____ : ____

3.




____ : ____

4.




____ : ____

5.




____ : ____

6.




____ : ____

7.




____ : ____

8.




____ : ____

9.




____ : ____

10.




____ : ____

11.



____ : ____

12.



____ : ____