

ALL ABOUT CLOUDS

Label these clouds and write the names in the box given below each picture.

(Find the answers in the next page.)




ANSWERS




1 Cirrus



2 Cirrocumulus




3 Cirrostratus



4 Cumulus



5 Stratus



6 Nimbostratus